



DELHI PUBLIC SCHOOL, SRINAGAR

LANGUAGE: ENGLISH

PRACTICE WORKSHEET

NAME: _____

PREVIOUS CLASS: II

NEW CLASS: III

SECTION A: COMPREHENSION

1. Read the passage carefully and choose the correct answers:

The winter holidays will start in a week. My best friend and I will have a lot of fun. We will go and play in the snow. Aunt Kusum will take us to Gulmarg. We will take biscuits and tea with us. I love snow. So, we will make a funny snowman. We will play and throw snowballs at each other. We will tell stories to each other.

a. Write down three nouns from the passage:

1. _____

2. _____

3. _____

b. Write the plural form of the following nouns:

1. friend: _____

2. story: _____

3. holiday: _____

4. tea: _____

c. Rearrange the sentences in the correct order and write them in the space given below:

i. We will tell stories to each other.

ii. We will make a funny snowman.

iii. Winter holidays will start in a week.

iv. We will throw snowballs at each other.

v. Aunt Kusum will take us to Gulmarg.

i.

ii.

iii.

iv.

v.

SECTION B: WRITING

2. Here are a few sentences about Kiran and his pet dog. The words in the sentences are jumbled. Rearrange the words and write the sentences in the space provided.

a. am/Kiran/I _____

b. my/is/dog/This _____

c. name/Blackie/His/is _____

d. Blackie/his/kennel/lives/in _____

e. I/my/dog/love _____

3. Look at the following sentences. A capital letter and a full stop are missing in each of them. Write the sentences correctly in the space provided.

a. a girl went to the farm to milk the cows

b. she put the pail of milk on her head

c. on her way home, the girl did not see a small hole in the road

d. she slipped and fell into the hole

e. the milk spilled

f. the girl started crying


1. GUIDED PICTURE COMPOSITION

Look at this picture.

Write five sentences about what you see in the picture.

Use the words given below to help you:


- angry
- jungle
- bear
- boy and girl
- running
- afraid
- fast




2. Look at the pictures and write a sentence about each:



1. The birds are flying. _____



2. _____



3. _____

SECTION C: GRAMMAR

7. Word Wonder

Break each word into two smaller words.

a. armchair = _____ + _____

b. airport = _____ + _____

c. dressmaker = _____ + _____

d. grandchild = _____ + _____

e. rainstorm = _____ + _____

f. keyboard = _____ + _____

g. saucepan = _____ + _____

h. shipyard = _____ + _____

i. newspaper = _____ + _____

j. teashop = _____ + _____

k. workbook = _____ + _____

l. butterfly = _____ + _____

m. rainbow = _____ + _____

n. honeybee = _____ + _____

o. eyeball = _____ + _____

SECTION D: PHONIC DRILL

8. Read the words starting with the following blends and add more to the list on

your own:

bl :

- a. black
- b. blow
- c. blender
- d. bleach
- e. blame

f. _____

g. _____

h. _____

i. _____

j. _____

fl :

- a. flap
- b. flat
- c. flash

d. _____

ch :

- a. chain
- b. chef
- c. champ
- d. chase
- e. chip

f. _____

g. _____

h. _____

i. _____

j. _____

e. _____

f. _____

g.

h. _____

Practice work for class IInd promoted to class IIIrd

دہلی پبلک اسکول، سرینگر

جماعت: تیسری

مضمون:- اُردو

سوال نمبر ۱: درج ذیل عبارت کو غور سے پڑھ کر سوالات کے جواب لکھئے۔ اور خالی جگہوں کو پُر کیجئے۔

(نادیدہ عبارت)

گھنے بادل آسمان پر چھائے ہوئے تھے مور نے کہا، تم برستے کیوں نہیں ہو؟
”میں تمہارے لئے ناچوں گا“ مچھلی نے کہا ”مہربانی کر کے برسو! مجھے اور پانی کی
ضرورت ہے“ کسان بولا۔ برائے مہربانی برسو! مجھے اگلی فصل کے لئے بیج بونا
ہے۔ بادل تیز اور موٹی موٹی بوندوں کے ساتھ برسنا۔ مور نے اپنے خوبصورت
پروں کو پھیلا یا اور نرم رفتاری سے رقص (ناچ) کرنے لگا۔ تالاب بھر گئے۔
مچھلی خوش ہو گئی۔ کسان بیج بونے میں مشغول (مصروف) ہو گیا۔
بادل نے سب کے دلوں کو خوشیوں سے بھر دیا اور آگے بڑھ گیا۔

سوال نمبر ۱: کیسے بادل آسمان پر چھائے ہوئے تھے؟

سوال نمبر ۲: کون کون چاہتا تھا کہ بادل برسے؟

سوال نمبر ۳: کسان کیوں چاہتا تھا کہ بادل برسے؟

سوال نمبر ۴: بادل برسنے کے بعد مور نے کیا کیا؟

سوال نمبر ۵: کون خوش ہوئی؟

दिल्ली पब्लिक स्कूल, श्रीनगर
कक्षा - दूसरी से तीसरी
सर्दियों का अभ्यास कार्य

नाम : -----

वर्ग : -----

प्रश्न १. नीचे दिए अनुच्छेद को पढ़कर प्रश्नों के उत्तर लिखिए:-

ईद मुसलमानों का प्रमुख त्योहार है।

यह त्योहार भाईचारे का संदेश देता है।

ईद को ईद-उल-फ़ितर के नाम से भी जाना जाता है।

ईद के एक महीने पहले से मुसलमान लोग रोज़ा रखते हैं।

चाँद देखने के दूसरे दिन ईद मनाई जाती है।

लोग एक-दूसरे के गले मिलकर ईद-मुबारक देते हैं।

घर में तरह-तरह के पकवान बनाए जाते हैं।

१. ईद का त्योहार क्या संदेश देता है?

२. ईद के त्योहार को और किस नाम से जाना जाता है?

३. घर में तरह-तरह के क्या बनाए जाते हैं?

प्रश्न २. नीचे दिए अशुद्ध वाक्यों को शुद्ध करके लिखिए:-

१. मेरा रीता नाम है

२. मीरा सब्जी लाई बाज़ार से

३. आज का मत काम कल पर छोड़

४. माता का पिता आदर कर

प्रश्न ३. नीचे दिए शब्दों के वाक्य बनाइए:-

१. दिन

२. प्रसन्न

३. रात

ॡ. डररश

डुरशुन ॡ. अडुनर डुनडसंदु कवतर कडर सहतर डररुत डुनरइरः-



DELHI PUBLIC SCHOOL, SRINAGAR







PRACTICE WORK

SUBJECT : Mathematics

NAME:

CLASS II PROMOTED TO CLASS III.

Q1. Draw a line to each matching difference to connect each planet to a fact about it.

<p>Mars</p>  $\begin{array}{r} 694 \\ - 421 \\ \hline \end{array}$
<p>Saturn</p>  $\begin{array}{r} 935 \\ - 123 \\ \hline \end{array}$
<p>Mercury</p>  $\begin{array}{r} 573 \\ - 241 \\ \hline \end{array}$
<p>Pluto</p>  $\begin{array}{r} 937 \\ - 304 \\ \hline \end{array}$
<p>Earth</p>  $\begin{array}{r} 437 \\ - 225 \\ \hline \end{array}$
<p>Uranus</p>  $\begin{array}{r} 968 \\ - 413 \\ \hline \end{array}$



$\begin{array}{r} 397 \\ - 185 \\ \hline \end{array}$ <p>I am a ball of rock and metal but covered with soil, rock, and water.</p>
$\begin{array}{r} 982 \\ - 650 \\ \hline \end{array}$ <p>I am a bare, rocky ball similar to Earth's moon.</p>
$\begin{array}{r} 847 \\ - 214 \\ \hline \end{array}$ <p>I am usually the farthest planet from the sun.</p>
$\begin{array}{r} 963 \\ - 151 \\ \hline \end{array}$ <p>I am surrounded by seven flat rings made of pieces of ice.</p>
$\begin{array}{r} 857 \\ - 302 \\ \hline \end{array}$ <p>I am a planet with 15 moons.</p>
$\begin{array}{r} 596 \\ - 323 \\ \hline \end{array}$ <p>I am called the Red Planet.</p>

Q2. Add or subtract to solve.



A. 168 people are in line to buy tickets. 159 seats are available in the theater. How many people will not get a ticket to the movie?


B. 427 people attended the rush hour show. 289 people attended the 7:00 show. How many attended both shows altogether?

C. 507 people ordered a popcorn and a soda. 278 people ordered popcorn only. How many more people ordered a soda?

D. 319 people bought a Pizza
299 people bought a box of candy.
How many Pizza and candy were sold altogether?

E. There were 826 people at the movie theater on Friday. On Saturday, there were 697 people. How many more people were at the movie theater on Friday?

F. 258 people ordered a burger with mustard. 273 people ordered a burger with ketchup. How many burger were ordered in all?



Q3. Divide the following by long division method:

a) $45 \div 9$

b) $56 \div 7$

c) $64 \div 8$

d) $35 \div 5$

e) $63 \div 7$

f) $42 \div 6$

g) $81 \div 9$

h) $36 \div 4$

Q4. Write and learn tables 2 to 10.

NOW HAVE SOME FUN !



LETS PLAY.

Tic-Tac-Toe

How to Play:

1. Solve the problems in the first row of a game.
2. Mark the gameboard with an X or O for the largest answer.
3. Continue to solve the problems in each row to try to get three in a row.

Game 1			Game 2	
X	O		X	O
$\begin{array}{r} 374 \\ + 263 \\ \hline \end{array}$	$\begin{array}{r} 429 \\ + 187 \\ \hline \end{array}$		$\begin{array}{r} 166 \\ + 117 \\ \hline \end{array}$	$\begin{array}{r} 149 \\ + 69 \\ \hline \end{array}$
$\begin{array}{r} 154 \\ + 199 \\ \hline \end{array}$	$\begin{array}{r} 740 \\ - 286 \\ \hline \end{array}$		$\begin{array}{r} 801 \\ - 389 \\ \hline \end{array}$	$\begin{array}{r} 722 \\ - 305 \\ \hline \end{array}$
$\begin{array}{r} 643 \\ + 208 \\ \hline \end{array}$	$\begin{array}{r} 341 \\ + 459 \\ \hline \end{array}$		$\begin{array}{r} 318 \\ + 218 \\ \hline \end{array}$	$\begin{array}{r} 266 \\ + 243 \\ \hline \end{array}$
$\begin{array}{r} 973 \\ - 784 \\ \hline \end{array}$	$\begin{array}{r} 514 \\ - 188 \\ \hline \end{array}$		$\begin{array}{r} 576 \\ + 268 \\ \hline \end{array}$	$\begin{array}{r} 607 \\ + 266 \\ \hline \end{array}$
$\begin{array}{r} 291 \\ + 263 \\ \hline \end{array}$	$\begin{array}{r} 445 \\ + 375 \\ \hline \end{array}$		$\begin{array}{r} 629 \\ - 457 \\ \hline \end{array}$	$\begin{array}{r} 785 \\ - 657 \\ \hline \end{array}$



DELHI PUBLIC SCHOOL, SRINAGAR

Athwajan, Srinagar – 190004.


Winter Assignment

SUBJECT: Evs

CLASS:II going to III

Q1. Make a chart on healthy foods for strong muscles and bones. Collect as many pictures as you can and paste them on the chart.

Q2. A few letters have been shown below. Identify and write their names in the two bunches of grapes. First letter of each bunch gives us beautiful message. Colour the grapes green and write the alphabet with sketch pen.



Q3. Draw, colour and name two vegetables of each type as mentioned in the figure.



Q5. Write the names of five: trees, shrubs, herbs, creepers and climbers.

TREES	SHRUBS	HERBS	CREEPERS	CLIMBERS
.....
.....
.....
.....
.....

Q6. Write a paragraph on 'save water'.

.....

.....

.....

.....

Q4. Do reading of first four lessons of your text book. Learn and write new words.

Q7. Read the following passage carefully.

Our body has a framework of bones called the skeleton. It gives shape and support to our body. There are 206 bones in our body. Bones support and protect the soft inner body parts. The place where two or more bones are joined together is called a joint. Our bones are covered with muscles. Muscles help us to move our bones. There are more than 600 muscles in our body. The bones and muscles of our body work together. Eating healthy food and regular exercise make our muscles strong. There are many parts inside our body. These inner body parts are called organs. The brain helps us to think and remember, the heart pumps blood, the lungs help us to breathe, and the stomach digests food.

Answer the following questions.

(a) What are joints?

.....
.....

(b) Why do we need to exercise?

c) Give one word for each of the following:

- (a) A framework of bones _____
- (b) Inner parts of our body _____
- (c) An organ that pumps the blood _____
- (d) An organ that help us to breathe _____

