	DELHI PUBLIC SCHOOL, SRINAGAR	
	ENGLISH LANGUAGE	
	WINTER ASSIGNMENT	
	NAME:	CLASS: 1st
	ROLL NO.	SEC. :

Q1. Frame sentences with the following words. Do not begin your sentence with 'this' or 'that':

i) tree:

ii) grow:

iii) clever:

iv) seed:

v) watch:

vi) scream:

vii) kind:

viii) rain:

ix) friend:

x) town:

Q2. Fill in the blanks with appropriate action words.

i) We _____ with our hands.

ii) I _____ an apple every day.

iii) Tim _____ with his toys.

iv) The bell _____.


v) Laura _____ cartoon shows on television.

vi) Let us _____ cricket in the park.

vii) I _____ with a pencil.

viii) Birds _____ in the sky.

Q3. Look at the picture given below and write five sentences about it.



1. _____
2. _____
3. _____
4. _____
5. _____

Q4. Circle the proper nouns and underline the common nouns in the following sentences:

- i) Tina plays games on her computer.
- ii) My brother went to Pizza Hut.
- iii) Lisa has a pet cat named Fluffy.
- iv) John went to the library on Monday.
- v) My teacher is Ms Shazia.
- vi) Alice likes art and craft.
- vii) The zoo will be closed on Sunday.
- viii) Sarah loves spending time with her new dog.

Q5. Choose the correct demonstrative pronoun:


- i) _____ is my favourite book. (this/ these)



- ii) _____ students are happy. (those/that)



- iii) _____ is a school bus. (those/that)



- iv) _____ chairs are comfortable. (this/these)



Q6. Write the correct article (a / an) before each noun:

_____ igloo	_____ bench
_____ banana	_____ tree
_____ kite	_____ ice cream
_____ ostrich	_____ hat
_____ arm	_____ desk
_____ chair	_____ egg
_____ umbrella	_____ book

Q7. Fill in the blanks with the correct position word:

- i) The rat is _____ the mat. (on/in)
- ii) The ball is _____ the box. (between/in)
- iii) The clock is _____ the shelf. (at/above)
- iv) The slippers are _____ the chair. (under/in)
- v) The man is hiding _____ the door (in/behind)
- vi) The lion jumps _____ the wall. (over/under)
- vii) The man is sitting _____ the tree. (under/between)
- viii) The girl is standing _____ the board. (over/in front of)
- ix) The dog is sleeping _____ the two rocks. (between/over)

Q8. Underline the describing words in the following sentences:

- i) The dog found a large stick.
- ii) The little tree is easy to climb.
- iii) My mom is a pretty lady.
- iv) Mina wore a red dress.
- v) There are three plates on the table.

vi) The bright light hurts my eyes.

vii) My bag is red in colour.

viii) Mina is a strong girl.

ix) The tea is hot.

x) Lisa has brown eyes.

Q9. Replace the underlined nouns with the appropriate pronouns and rewrite the sentences.

i) My brother is tall.

ii) Jen and Sara are good friends.

iii) My bother and I like to go to Disneyland.

iv) Laura was watching a cricket match.

v) Rohan will go to New York tomorrow.

vi) The pigeon is on the tree.

vii) My school has a big building.

viii) Mini saw a little turtle in the sea.

ix) Abhay loves his little brother.

x) The tortoise is very slow.

Q10. Complete the following sentences with the opposites of the highlighted words:

- i) Giraffe has a **long** neck but lion has _____ neck.
- ii) Tea is **hot** but ice-cream is _____.
- iii) My friend is **happy** but I am _____.
- iv) Aeroplanes are **fast** but bicycles are _____.
- v) Do not sit on the floor, it is **hard**. Sit on the sofa, it is _____.
- vi) The **young** girl helped an _____ man to cross the road.
- vii) Rohan wants to wear a **black** shirt but his mother gave him a _____ shirt.
- viii) Rajini is **strong** but Mini is _____.

Q11. Read each word given below and turn it into a plural noun by adding 's'.

chair	_____
pencil	_____
book	_____
toy	_____
tree	_____
garden	_____
boy	_____
window	_____
frog	_____
apple	_____
key	_____

Q12. Fill in the blanks with conjunctions "and" or "but".

- i) He is kind _____ beautiful.
- ii) I am going to my aunt's home _____ I will not stay there.
- iii) I hurt my leg _____ I still played football.
- iv) Would you like to have some tea _____ cookies?
- v) Aman is my friend _____ I do not like it when he lies.

Note: Do page no. (20-23), 70, 75, 76, 77, 78 and 80 (comprehension-6) in grammar (step by step) book.

Kindly make your ward drill the below mentioned sight words on daily basis:

please	pretty	ride	under	white	would	could	should
after	before	again	every	know	let	live	may
might	open	close	over	put	around	but	much
stop	take	thank	them	think	walk	warm	when
which	always	because	off	been	best	both	buy
does	don't	fast	found	gave	pull	read	very
answer	write	wrong	right	upon	wish	work	question

Handwritten signature:
Anshul
Gaurav



DELHI PUBLIC SCHOOL, SRINAGAR

WINTER ASSIGNMENT

MATHEMATICS

NAME _____

CLASS I / SEC: _____

Q1. Fill in the missing numbers.

a) 9, 10, _____ 16

b) 18, 19, _____ 22 _____

c) 29, _____ 33 _____ 36

d) _____ 42 _____

e) 57, _____ 61 _____ 64

f) 76, _____ 81 _____

g) 93, _____ 97 _____

Q2. Write in tens and ones.

a) 20 _____ tens _____ ones

b) 61 _____ tens _____ one

c) 14 _____ ten _____ ones

d) 82 _____ tens _____ ones

e) 99 _____ tens _____ ones

Q3. Arrange the following numbers in ascending order.

a) 42, 29, 60, 15 _____

b) 76, 36, 88, 93 _____

Q4. Arrange the following numbers in descending order.

a) 95, 59, 73, 47 _____

b) 41, 78, 80, 36 _____

Q5. Put the correct sign $>$, $<$ or $=$ in the given boxes.

a) 46 13

b) 72 47

c) 18 18

d) 51 90

e) 65 79

f) 22 11

Q6. Write the number name of the following numbers.

a) 11 _____

b) 14 _____

c) 21 _____

d) 12 _____

e) 40 _____

f) 58 _____

g) 99 _____

Q7. Fill in the blanks.

a) The number we get after adding is called the _____.

b) When the order of numbers in addition is changed, the sum does not _____.

c) Adding zero to a number gives the _____ number.

- d) When we subtract 1 from a number, we get the number just _____ it.
- e) When we subtract a number from itself, the answer is always _____.
- f) When we subtract zero from any number, we get the _____ number.

Q8. Find the sum.

a) $9 + 5 = \underline{\hspace{2cm}}$

b) $10 + 20 = \underline{\hspace{2cm}}$

c) $12 + 24 = \underline{\hspace{2cm}}$

d) $36 + 33 = \underline{\hspace{2cm}}$

e) $16 + 40 = \underline{\hspace{2cm}}$

f) $50 + 50 = \underline{\hspace{2cm}}$

Q9. Solve the following:

	T	O
	6	4
+	3	4

	T	O
	3	7
+	2	0

	T	O
	6	1
+	2	4

	T	O
	9	0
+	0	9

	T	O
	4	8
+	3	1

	T	O
	6	3
+	1	4

Q10. Naira has 45 marbles and her sister has 43 marbles. How many marbles do they have in all?

Sol: _____ = _____
 _____ = _____
 _____ = _____

T	O

Q11. Siya bought 28 green pencils and 31 white pencils. How many pencils does she bought altogether?

Sol: _____ = _____
 _____ = _____
 _____ = _____

T	O

Q12. Subtract the following.

T	O
1	3
-	<u>2</u>

T	O
2	6
-	<u>0 2</u>

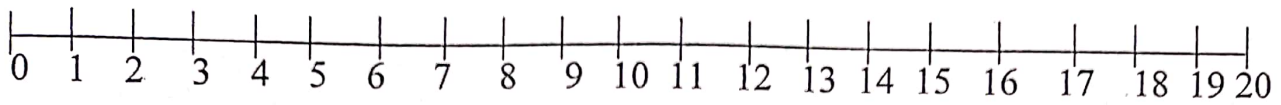
T	O
6	8
-	<u>4 3</u>

T	O
9	7
-	<u>1 2</u>

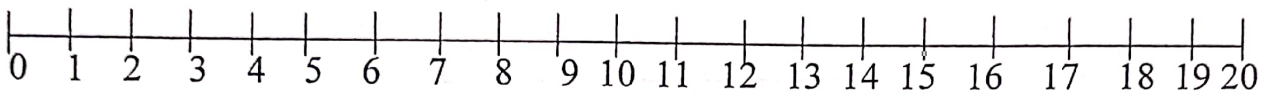
T	O
6	0
-	<u>0 0</u>

Q13. Subtract on the number line.

a) $15 - 5 = \underline{\hspace{2cm}}$



b) $20 - 4 = \underline{\hspace{2cm}}$



Q14. Solve the following problems:

a) Issa bought 37 glasses. 6 of them broke. How many glasses are left now?

Sol: $\underline{\hspace{4cm}} = \underline{\hspace{2cm}}$
 $\underline{\hspace{4cm}} = \underline{\hspace{2cm}}$
 $\underline{\hspace{4cm}} = \underline{\hspace{2cm}}$

T	O

b) Maria has 46 toffees. She gave 34 toffees to her friends. How many toffees are left with her?

Sol: $\underline{\hspace{4cm}} = \underline{\hspace{2cm}}$
 $\underline{\hspace{4cm}} = \underline{\hspace{2cm}}$
 $\underline{\hspace{4cm}} = \underline{\hspace{2cm}}$

T	O

Q 15. Look around the room and find objects that match the following shapes.
Write the names of the objects beside each shape.

a. circle: _____

b. square: _____

c. triangle: _____

d. rectangle: _____

Q16. Draw four plane shapes:





a.





b.

c.

d.

Q17. Complete the patterns:

a.     _____

b.     _____

c. 3 6 9 12 15 _____

d. Aa Bb Cc Dd _____

Q18. Create your own patterns:

a. _____

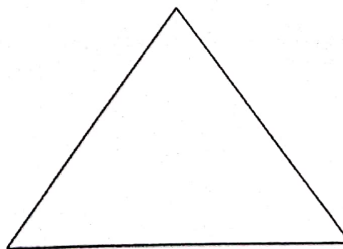
b. _____

Q19. Identify the shapes given below and write their properties.

a. Name: _____

No. of corners: _____

No. of sides: _____




b. Name: _____

No. of corners: _____

No. of sides: _____


No. of equal sides: _____



c. Name: _____

No. of corners: _____

No. of sides: _____




d. Name: _____

No. of sides: _____

No. of corners: _____

No. of equal sides: _____



AD
Gaius



DELHI PUBLIC SCHOOL, SRINAGAR
WINTER ASSIGNMENT
SUBJECT: EVS

Class Ist	Name :	Sec:

Q1. Fill in the blanks using the words given in the box.

colourful	milk	shrub	valley
plants	cotton	health	dark
Eid-UI-Fitr	Republic day		

1. The low land between two hills or mountains is called a _____.
2. Trees, shrubs and herbs are called _____.
3. We wear _____ clothes in summer.
4. We make cheese from _____.
5. We celebrate _____ on 26th January.

6. We like to wear _____ clothes on special occasions.

7. The rose plant is a _____.

8. _____ is celebrated to mark the end of the month of fasting.

9. We should eat food that is good for our _____.

10. _____ clouds bring rain.

Q 2. Answer the following questions:

a) Name two types of houses.





b) Mention any two main seasons.

c) Write the names of any two National festivals of India.


Riddle Time

Plants are an important part of our life. There are different types of plants.

Q3. Crack the given riddles and find them.

<p>I have a long stem. I have yellow petals. People eat my seeds. What am I?</p> <hr/>	<p>I have thorns on my stem. My petals can be many colours. I smell nice. What am I?</p> <hr/>		
<p>I have flat leaves. I drop acorns. I am very tall. What am I?</p> <hr/>	<p>I am green. People walk on me. I get cut. What am I?</p> <hr/>		
			

Q4. Give two reasons why the plant below won't grow very well.



1. _____

2. _____

Q5. Draw lines to match the words with the pictures depicting different seasons.



short days colder umbrella warmer long days gumboots

Q6. Tick the correct option.

1. Small plants having soft and green stems are called
a) shrubs b) herbs c) bushes
2. A tree is decorated with lights and stars on
a) Baisakhi b) Christmas c) Independence day
3. Land covers only a small part of the
a) earth b) moon c) water
4. Most of the people live on
a) hills b) plains c) mountains
5. Moving air is called
a) storm b) breeze c) wind


Project work:

Make a model of any type of animal and its home.

OR

Prepare a garden scene with different types of plants.

Paiwa

<p>دہلی پبلک اسکول، سرینگر</p> <p>مضمون: اردو</p> <p>سرمائی تعطیلات</p>		
<p>نام:</p>	<p>جماعت: اول</p>	
<p>سیکشن:</p>	<p>گریڈ:</p>	

سوال نمبر: درجہ ذیل سطوروں پر حروف تہجی لکھئے۔

سوال نمبر ۲: درجہ ذیل الفاظ کو توڑ کر لکھیے۔

۱:- رستی

۲:- سفید

۳:- گل

۴:- وقت

۵:- کٹا

سوال نمبر ۳: درجہ ذیل حروف کو جوڑ کر لکھیے۔

۱: س + ن =

۲: م + ل + ک =

۳: ج + ا + ل =

۴: م + و + ر =

۵: ہ + ر + ن =

سوال نمبر ۴:- درجہ ذیل دو چشم ”ھ“ والے حروف لکھیے۔

۱: _____ ۲: _____ ۳: _____ ۴: _____ ۵: _____

۶: _____ ۷: _____ ۸: _____ ۹: _____ ۱۰: _____

سوال نمبر ۵:- نیچے دیئے گئے خانوں میں ’واحد‘ کے ’جمع‘ لکھیے۔

۱: لڑکا

۲: تارا

۳: انڈا

۴: کیلا

سوال نمبر ۶:- نیچے دیئے گئے خانوں میں ’مذکر‘ کے ’مونث‘ لکھیے۔

مرد

دادا


نانا

باپ


مور

شیر

سوال نمبر ۷: تصاویر کو گن کر لفظوں والی گنتی لکھیے




۱:



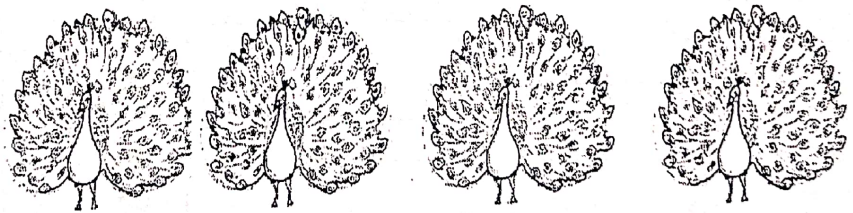
۲:



۳:



۴:



۵:

سوال نمبر ۸: نیچے دیئے گئے الفاظ کے جملے لکھیے۔

جملے

الفاظ

۱: پانی

۲: میز

۳: کاپی




۴: لال

۵: باغ

۶: پیڑ

۷: چابی

سوال نمبر ۹: تصاویر کو پہچان کر نام لکھیے۔



Saima



DELHI PUBLIC SCHOOL, SRINAGAR

Subject: Information Technology

WINTER ASSIGNMENT

NAME:

ROLLNO:

CLASS: I going to II

Q1. Name different parts of computer.

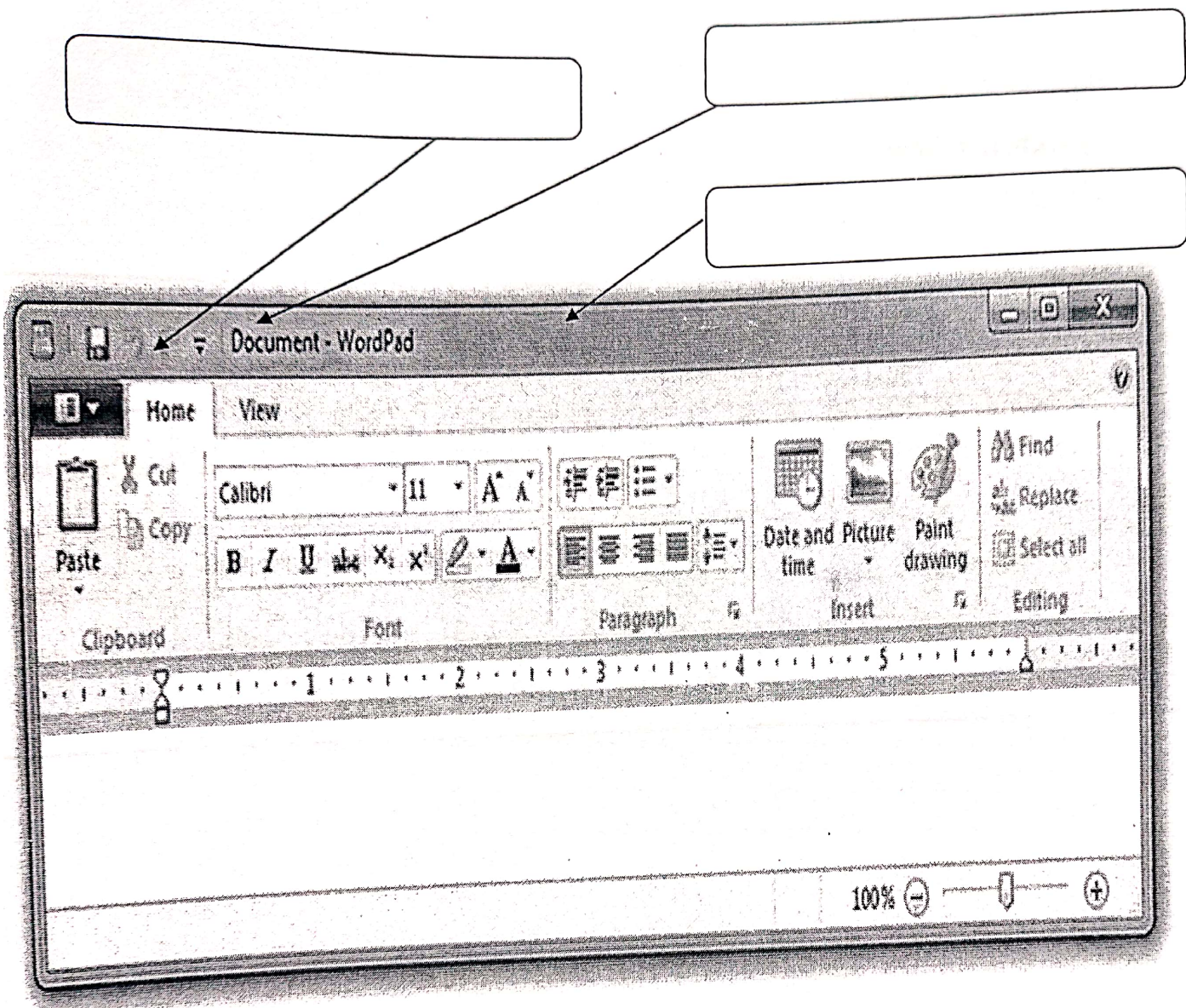
Q2. Write the names of any three special keys of keyboard.

Q3. Name three mouse actions.

Q4. Write steps to open Ms Paint.

Q5. Write steps to open WordPad.

Q6. Label the screen elements of WordPad.



Q7. Type few sentences about your activities that you would do during winter
Vacation in WordPad.


Q8. Color the keys of the keyboard according to the color code given below:

Alphabet Keys: Red

Enter Keys: Blue

Number Keys: Green

Spacebar: Yellow



Prime

MA



دلی پبلک سکول اٹھواجن، سرپنگر

مضمون: کاشتر

اول جماثر باپتھ وونڈ کالم

رول نمبر-----

سکشن-----

س: ۱: 'ا' پٹھ ے ' تام لیکھو اچھر؟

س: ۲: دُچشم اچھر لیکھو؟

س: ۳: زبر آواز ہندری پانژھ لفظ لیکھو؟

س ۴: دینہ آمتہ لفظو منثر آ رومد آواز ہندی لفظ تہ گریوینہ گنہ قلمبند۔

ناو، نب، کاو، ڈوئن، ژوٹ، آب، گاو، کول، آسمان، کور، آلو، گاش،
قلم، آفتاب، وٹھ، آرام، بادام۔

س ۵: آمالہ آواز ہندی پاٹھ لفظ لیکھو؟

س ۶: آمالہ مد (ا) آواز ہندی شے لفظ لیکھو؟

س ۷: کشپر چھ پتہ ثقافتی تہ تمدنی اعتبار واریاہ مشہور، سماوار، پھرن تہ طش نار یمن تر بن چیزن
ہنزلو کچہ لو کچہ شکلہ بناؤ تاکہ پٹن میراث روز ژبتس؟